

ANSWERS

Decimals, Dials & Metric Units

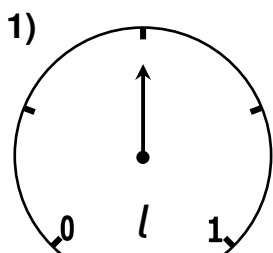
Volume

What volume do the following dials indicate?

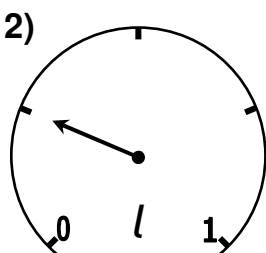
Give your answers in a) litres (l) and b) millilitres (ml).



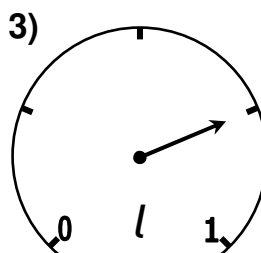
1 a) 0.5 l b) 500 ml



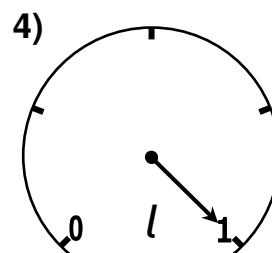
- a) 0.5 l
b) 500 ml



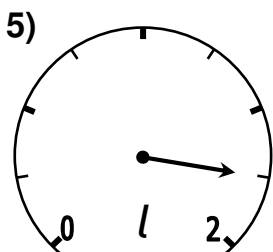
- a) 0.25 l
b) 250 ml



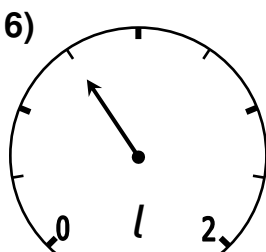
- a) 0.75 l
b) 750 ml



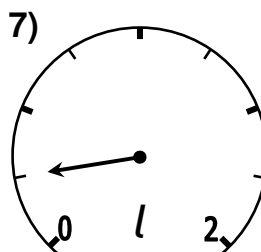
- a) 1 l
b) 1000 ml



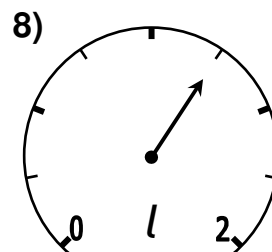
- a) 1.75 l
b) 1750 ml



- a) 0.75 l
b) 750 ml



- a) 0.25 l
b) 250 ml



- a) 1.25 l
b) 1250 ml

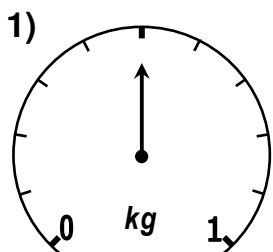
Weight

What weight do the following dials indicate?

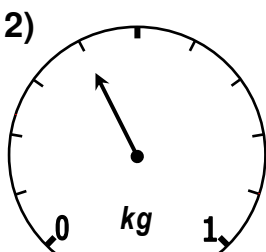
Give your answers in a) kilograms (kg) and b) grams (g).



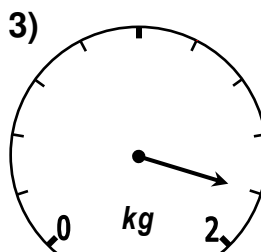
1 a) 0.5 kg b) 500 g



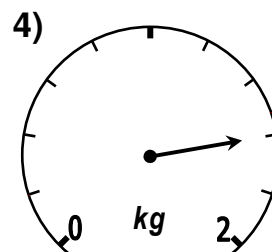
- a) 0.5 kg
b) 500 g



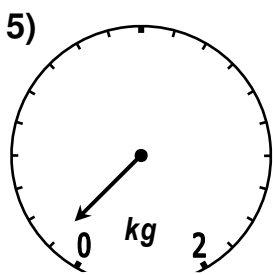
- a) 0.4 kg
b) 400 g



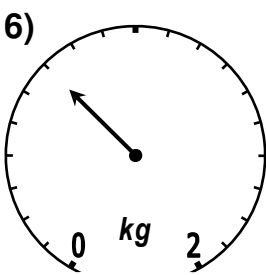
- a) 1.8 kg
b) 1800 g



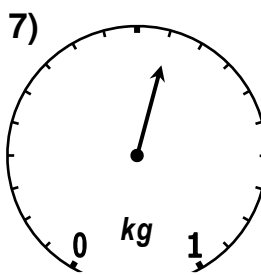
- a) 1.6 kg
b) 1600 g



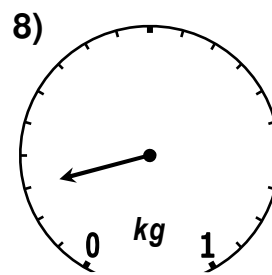
- a) 0.1 kg
b) 100 g



- a) 0.7 kg
b) 700 g



- a) 0.55 kg
b) 550 g



- a) 0.15 kg
b) 150 g