

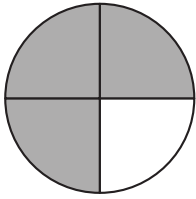


# Equivalent Fractions 3

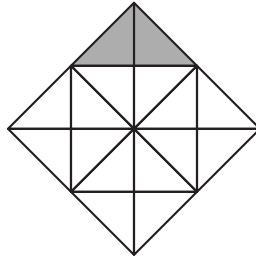


The first shape has been shaded for you.

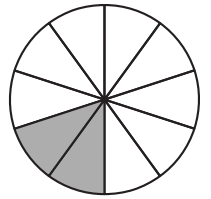
1)  $\frac{15}{20}$



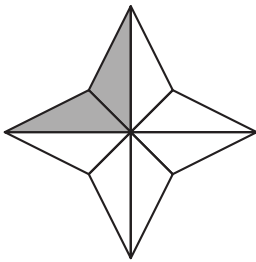
6)  $\frac{1}{8}$



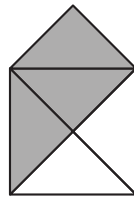
11)  $\frac{1}{5}$



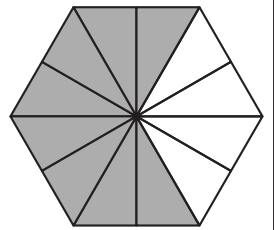
2)  $\frac{4}{16}$



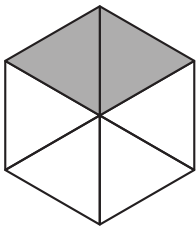
7)  $\frac{9}{15}$



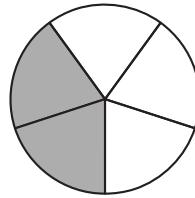
12)  $\frac{2}{3}$



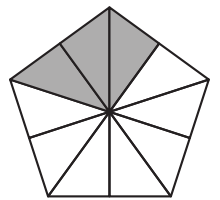
3)  $\frac{6}{18}$



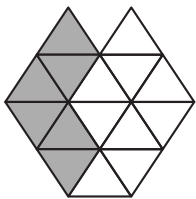
8)  $\frac{4}{10}$



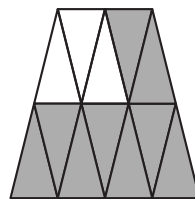
13)  $\frac{6}{20}$



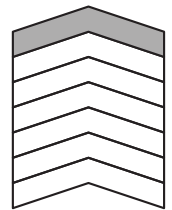
4)  $\frac{2}{5}$



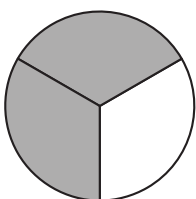
9)  $\frac{3}{4}$



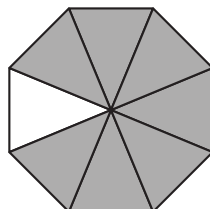
14)  $\frac{2}{14}$



5)  $\frac{4}{6}$



10)  $\frac{14}{16}$



15)  $\frac{1}{3}$

