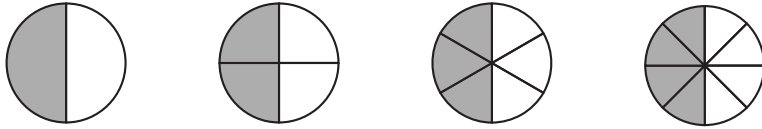


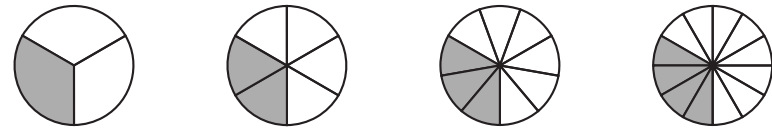
ANSWERS

Equivalent Fractions 2

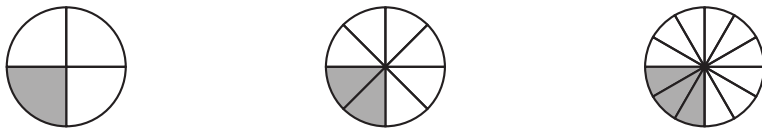
1) Shade in $\frac{1}{2}$ of each of these circles.



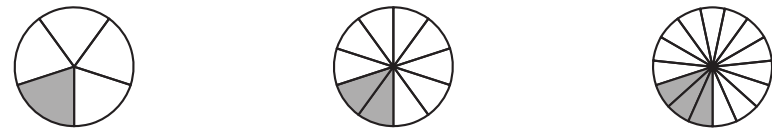
2) Shade in $\frac{1}{3}$ of each of these circles.



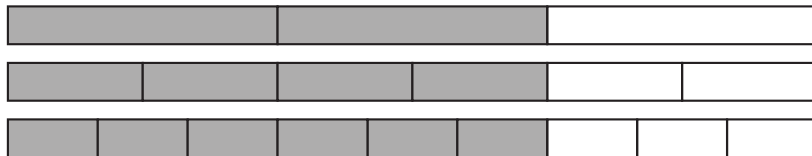
3) Shade in $\frac{1}{4}$ of each of these circles.



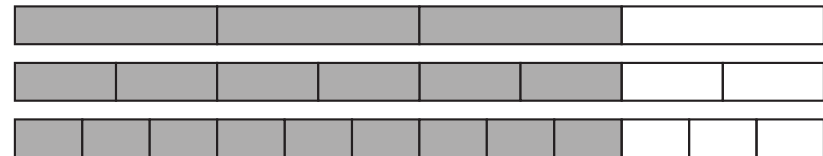
4) Shade in $\frac{1}{5}$ of each of these circles.



5) Shade in $\frac{2}{3}$ of each of these strips.



6) Shade in $\frac{3}{4}$ of each of these strips.



7) Shade in $\frac{2}{5}$ of each of these strips.



8) Shade in $\frac{4}{5}$ of each of these strips.

