



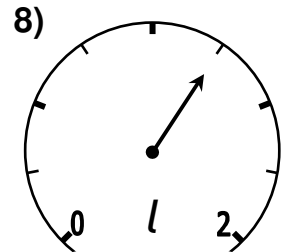
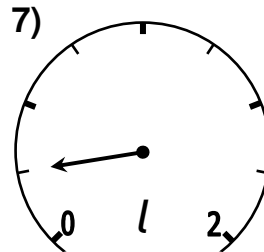
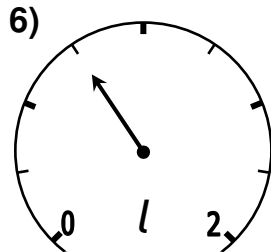
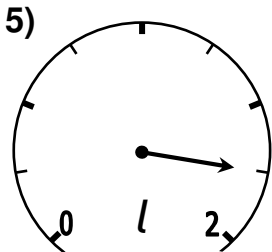
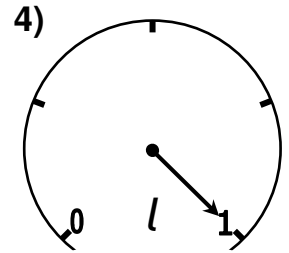
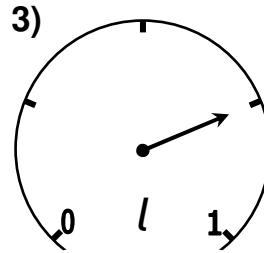
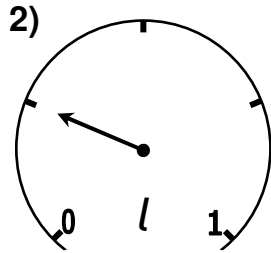
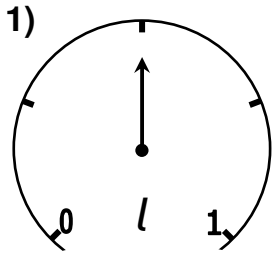
Volume

What volume do the following dials indicate?

Give your answers in a) litres (l) and b) millilitres (ml).



1 a) 0.5 l b) 500 ml



Weight

What weight do the following dials indicate?

Give your answers in a) kilograms (kg) and b) grams (g).



1 a) 0.5 kg b) 500 g

