

# ANSWERS

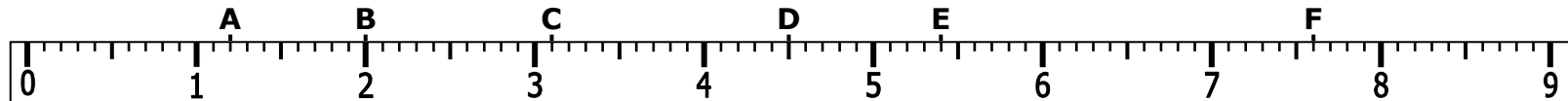


## Decimal Number Lines 2

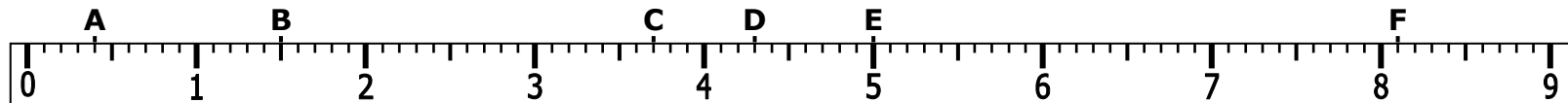


Mark each value on the number lines 1A) has been done as an example

- 1 A) 1.2 B) 2.0 C) 3.1  
D) 4.5 E) 5.4 F) 7.6



- 2 A) 0.4 B) 1.5 C) 3.7  
D) 4.3 E) 5.0 F) 8.1



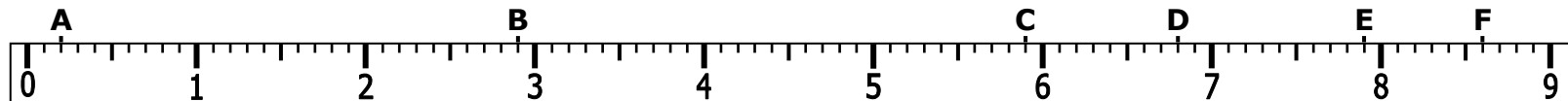
- 3 A) 0.6 B) 1.3 C) 2.1  
D) 3.4 E) 6.2 F) 7.5



- 4 A) 0.9 B) 1.7 C) 2.6  
D) 3.2 E) 4.0 F) 6.6



- 5 A) 0.2 B) 2.9 C) 5.9  
D) 6.8 E) 7.9 F) 8.6



- 6 A) 4.8 B) 5.1 C) 6.5  
D) 7.7 E) 8.3 F) 9.0

